

The page is framed by a decorative border featuring various school supplies like pens, pencils, a calculator, a microscope, and a globe, along with autumn leaves in shades of red, orange, and yellow. The background is a light blue color.

Suraj
SURAJ

SUMMER HOLIDAY
HOMEWORK

2024- 25

GRADE- 3

PREFACE

Dear Students, Parents, & Guardians,

Welcome to the Summer Adventure Homework!

As the warm embrace of summer beckons, we are excited to introduce this dynamic collection of activities designed to ignite curiosity, inspire creativity, and foster a love of learning throughout the summer break.

At **SURAJ**, we believe that learning is not confined to the four walls of a classroom but extends into every aspect of our lives. This summer homework has been crafted with that philosophy in mind, offering a blend of academic enrichment, imaginative exploration, and hands-on experiences to keep our learners engaged and excited about learning during their time away from school.

A treasure trove of activities specially tailored to the interests and abilities of learners by our **TEACHERS**. From engaging math challenges and captivating reading adventures to creative writing prompts, scientific investigations, and artistic endeavours, there's something here to captivate every young mind and spark a sense of wonder and discovery.

May your summer break be an unforgettable chapter in the annals of your family's story, a testament to the transformative power of education and the bonds of love.

With Love,

SURAJ SCHOOL



The journey of a thousand miles begins with one step

General instructions to be followed in summer vacation: -

- ❖ Complete and Revise the whole work done till date.
- ❖ Display your creativity in holiday homework.
- ❖ Meditate for 10-15 minutes daily.
- ❖ Practice yoga for at least half an hour daily.
- ❖ As the summers are at its peak, start keeping water for the birds on regular basis.
- ❖ Increase your intake of fresh fruits and water to keep you well hydrated and energetic.
- ❖ Holiday Home Work Submission Date will be 10th July, 2024 i.e Wednesday.





1.) Veggie Crossword

Search Vegetables in the puzzle below with the clues given:

G	R	E	E	N	P	E	P	P	E	R	H	K	R	F	T	Z
C	E	L	E	R	Y	G	C	T	R	A	D	I	S	H	U	A
U	C	K	C	Q	K	G	A	U	E	F	D	D	K	K	R	C
C	A	R	R	O	T	P	B	Y	C	R	M	N	K	K	N	L
A	T	L	W	E	E	L	B	H	U	U	O	E	O	E	I	L
U	Y	O	Y	C	Q	A	A	O	V	C	M	Y	X	T	P	I
L	L	L	M	A	B	N	G	S	Q	S	S	B	N	V	H	Z
I	S	P	C	A	O	T	E	W	A	N	R	E	E	H	C	E
F	P	A	U	G	T	Z	Q	E	A	B	L	A	S	R	A	T
L	R	R	F	X	U	O	P	E	B	E	M	N	P	Z	P	O
O	O	S	G	J	Z	N	B	T	R	E	U	L	I	Z	S	N
W	U	L	F	Q	E	H	P	P	O	T	S	E	N	L	I	I
E	T	E	F	E	C	G	Z	O	C	R	H	T	A	C	C	O
R	S	Y	R	N	P	V	T	T	C	O	R	T	C	I	U	N
C	B	G	E	Z	U	Q	S	A	O	O	O	U	H	M	M	O
U	R	R	L	C	O	R	N	T	L	T	O	C	W	Z	M	P
M	F	U	M	A	K	U	A	O	I	M	M	E	D	G	Z	D

Clues:

- | | |
|-------------|-------------|
| Greenpepper | Turnip |
| Radish | Carrot |
| Lettuce | Spinach |
| Sprouts | Tomato |
| Capsicum | Sweetpotato |
| Eggplant | Frenchbeans |
| Cauliflower | Mushroom |
| Greenpeas | Onion |
| Cabbage | |
| Kidneybean | |
| Broccoli | |
| Cucumber | |
| Gourd | |
| Lentil | |
| Parsley | |
| Celery | |
| Okra | |
| Corn | |
| Beetroot | |

2.) Know your Waste

- Blue, Green, and Red bins, they are there to throw your waste. But not in a hurry nor in a haste!

Draw three bins (blue, green and red), write down the kinds of waste which you would put in the blue, green and red bins.

Types of Dustbins



Non-biodegradable
Waste



Biodegradable
Waste



Dry &
Non-biodegradable
Waste

- What comes to your mind when you see the following? Write down your observations.
 - (a) A rag picker
 - (b) A cow eating a polythene bag
 - (c) dump yard near a residential area

Spelling rhyming words

Grade 2 Spelling Worksheet

Spell **two words** that rhyme with the word shown.

Use the word bank: only if you need to!



give

rich

rain

draw

.....

chew

check

lawn

Types of sentences

Instructions: Decide what type of sentence:

Declarative - Interrogative - Exclamatory - Imperative

1. Don't drop those apples. _____
2. Don't scare the birds away! . _____
3. Do you have your own computer? _____
4. Please be careful! . _____
5. What is the first letter of the alphabet? _____
6. Do you like chocolate cake? . _____
7. My name is Francisca. . _____
8. Today is a very sunny day. . _____
9. Please come down to eat your breakfast. _____
10. Wow! That looks amazing! _____
11. Please open the door. _____
12. What is your name? _____
13. Tomorrow we are going to the zoo. _____
14. Go to your class right now. _____
15. Can we watch a movie tonight? _____



1.)

जानिए मुझे

अपना एक पहचान पत्र बनाएँ, जिसमें अपना नाम, आयु, जन्मतिथि, कक्षा, अध्यापिका का नाम, मनपंसद विषय, प्रिय मित्र, अपनी पसंद के फल, भोजन, खेल और टी0 वी0 कार्यक्रम इत्यादि के बारे में लिखें।



2.) बताओ तो जानें



(क) सप्ताह के आखिरी दिन का नाम - _____

(ख) कौन से महीने में 28 दिन होते हैं? _____

(ग) साल के पहले महीने का नाम - _____

(घ) गाँधी जयंती किस महीने में मनाई जाती है? _____

(ङ) साल के आखिरी महीने का नाम - _____

(च) इतवार का दूसरा नाम - _____

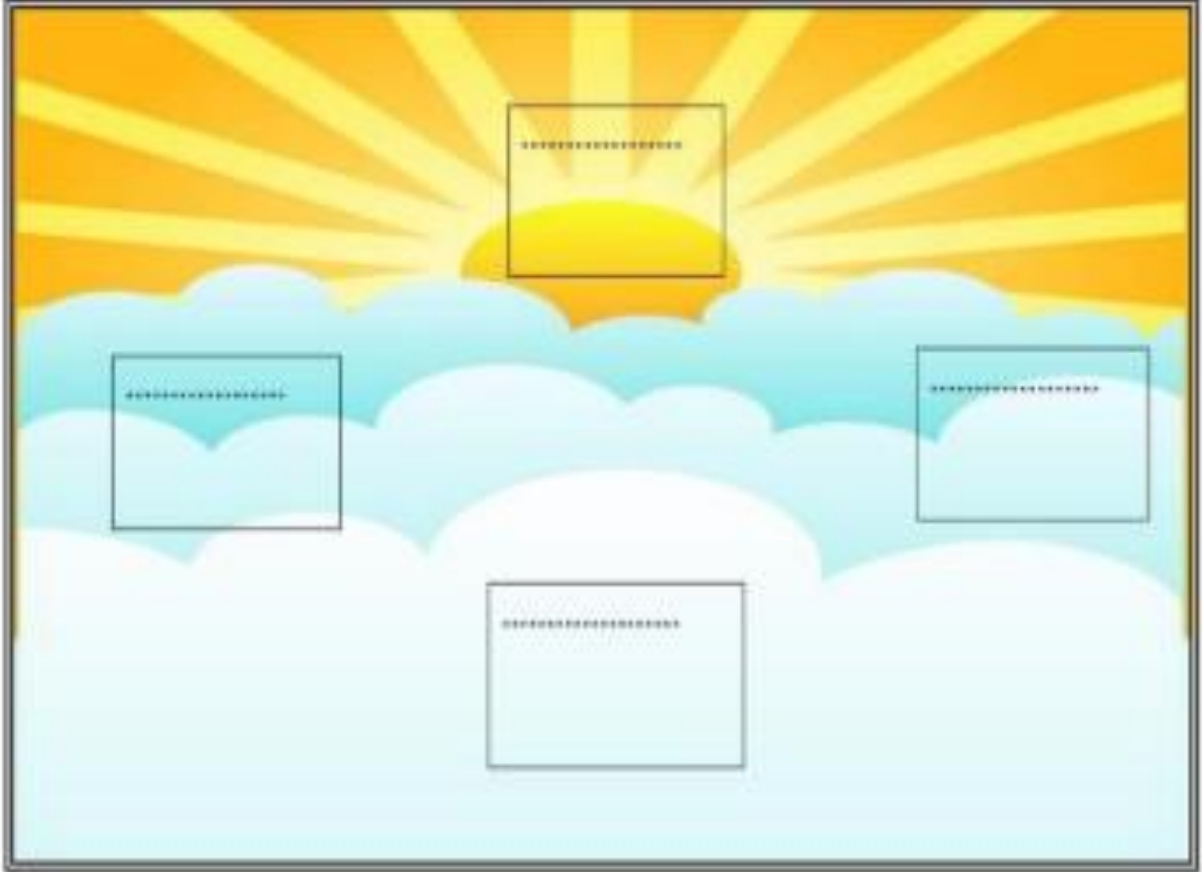
(छ) गणतंत्र दिवस _____ को मनाया जाता है।

(ज) साल के पाँचवें महीने का नाम है।

(झ) 'श' से शुरू होने वाले दिन और हैं।

(ञ) मेरा जन्मदिन के महीने में आता है।

3.) दिशाओं के नाम लिखो -



(क) सूर्य से निकलता है और
में डूबता है।

(ख) हिमालय भारत के में है।

(ग) कन्याकुमारी भारत के में है।

12.)

सोचिए समझिए और करिए –

प्रश्न 1– 'र' कई तरह से लिखते हैं। शब्द पढ़ो और सही जगह में लिखो–



वर्ग पहेली

निम्न वर्ग पहेली में बाँई ओर दिए निर्देश के अनुसार वर्ग पहेली पूरी करो –

1. वर्णों का समूह

1			2
---	--	--	---

2. ललाइन का पुल्लिंग शब्द

3			4
---	--	--	---

3. रात में गाँवों में रोशनी देने वाला

4. आँख का पर्यायवाची

5	6		
---	---	--	--

5. ईद के पहले वाला महीना

6. दानेदार/फलियों वाली सब्ज़ी

7		8		
---	--	---	--	--

7. राखी का त्योहार

8. वानर का तद्भव शब्द

9	10	
---	----	--

9. विश्व का पर्याय

10. समुद्र का तत्सम्

11	12		
----	----	--	--

11. अहं की भाववाचक संज्ञा

12. हंस का स्त्रीलिंग

13			
----	--	--	--

13. नीला है कंठ जिसका





1.) Find the birth date of six of your family members, then write it using Roman Numerals.

E.g. 24th April – XXIV– IV

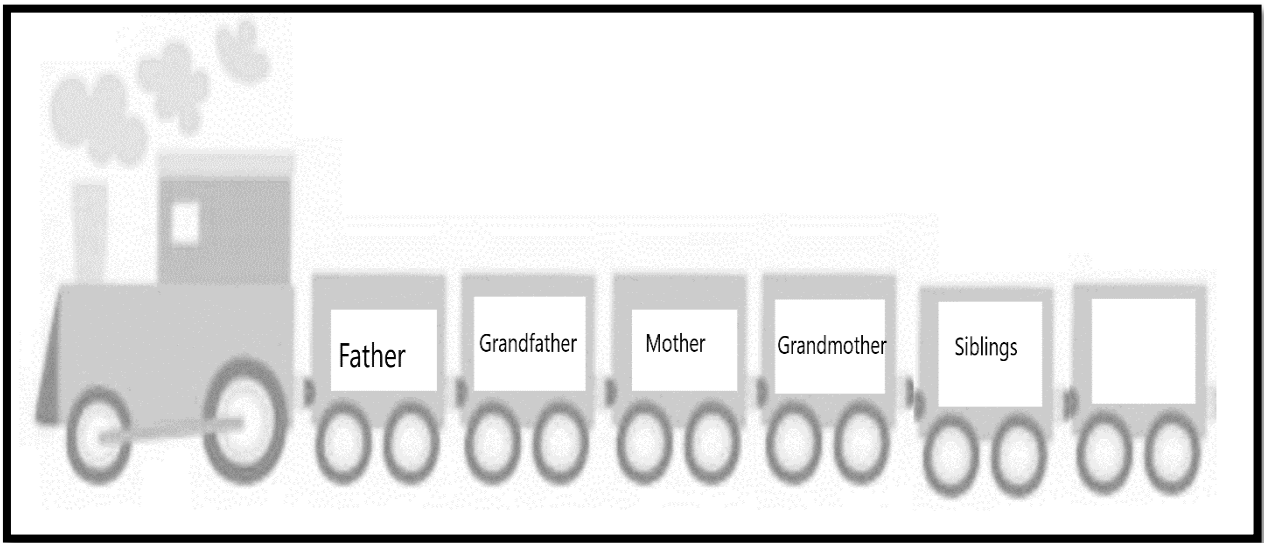
Collect your data and present on an A4 sized sheet (refer to the following table)

Name of Family member						
Date of Birth						
Roman Numeral						

2.) Family Time - Collect information about the birth year of your parents, grandparents, uncle, aunt and siblings.

On an A- 4 sized drawing sheet, make an engine and the coaches of a train using cut- outs from old newspapers, waste decorative material as shown below. (use your own creativity)

Colour them with bright colours and write the birth year numbers on them and answer the questions given below:



a) Arrange these years in ascending and descending order:

Ascending order: _____

Descending order: _____

b) Write the expanded form of the birth year number of the eldest member:

c) Write the roman numerals of the birth year of the youngest member:

E.g. 24th April – XXIV – IV

d) Write the birth year numbers which are even.

3) Given below are the names of some sports.

Decode the letters as

A= 1, B= 2, C= 3, D= 4 and so on

Look at the example and complete the following table:

SPORT	VALUES	SUM
FOOTBALL	$6 + 15 + 15 + 2 + 1 + 12 + 12$	63
T _ B _ _ T _ _ _ I _ _		
_ _ _ _ C _ _ T		
_ _ O _ _ E Y		
_ A _ _ _ N _ _ N		
G _ L _ _		
B _ _ _ _ I _ R _ _ _		


4..) Write the names of any 10 states according to your zone

- North Zone Roll no.1 to 10
- West Zone Roll no.11 to 20
- East Zone Roll no. 21 to 30
- South Zone Roll no.31 to 40

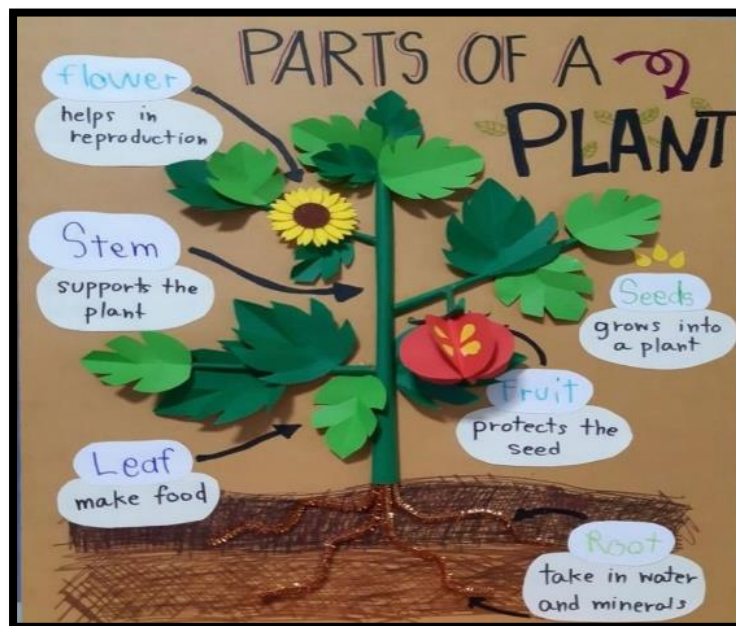
Now, write the answer of the following questions on an A4 sized sheet:

- Write the population in words and numerals.
- Arrange them in ascending and descending order.
- Find out the state with maximum and minimum population.

Note: Depict the states pictorially and use your creativity to represent your project work.



1.) Students will create a visual representation of a plant including roots, stems, leaves, flowers, and fruits. They can use craft supplies like pastel sheets, straw, beads, etc.



Use waste materials from your home as a planter and grow plant in it.

Instructions: - (Make all the items with the material which is easy available at home)

- Grow plant in the following: - (Method is given below)
 - Get coffee mugs, old pots, old shoes, old large mouthed bottles, etc.
 - Clean those properly, colour and decorate.
 - Grow plants in them.

2.) Create a beautiful mosaic art such as flowers, fish, boat, butterfly, etc. on an A3 sized sheet using different pulses or seeds and also research the different nutrients found in them.
(Refer to the given image)





3.Fill in the blanks using the given words to complete the process of sowing seeds and growing a plant:


sun water pot soil
seeds hole finger plant

Place some _____  into a _____ .

Make a _____  with your _____ .





Drop some _____  into the _____ .

Cover the _____  with _____ .




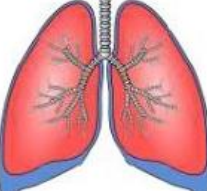

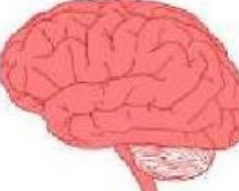
Pour _____  into the _____ .

Give your _____  lots of _____ .

Wait for your new _____  to grow!

	<p>4 Complete the sentences. Write the numbers. seed dies flowers leaves</p> <p>A _____ grows in the ground. <input type="text"/></p>
	<p><u>Roots</u> start to grow.</p> <p>The plant grows a <u>stem</u> and _____. <input type="text"/></p>
	<p>The plant grows _____ with lots of <u>seeds</u> in the <u>centre</u>. <input type="text"/></p>
	<p>The plant _____. The <u>seeds</u> fall to the <u>ground</u> <input type="text"/></p>

4.) Write the name of the major organs corresponding to the given images.

		
1. _____	2. _____	3. _____
		
4. _____	5. _____	6. _____
<p>Which organ is missed? The organ missed is the _____</p>		

Types of Plants



1. Fill in the blanks with the correct words.

- Plants are of different shapes and _____. (sizes / legs)
- Big trees with strong woody stems are called (herbs / trunks)
- Plants that have weak stems and grow along the ground. They are called _____. (climbers / creepers)
- The _____ (root / stem) carries water to all parts of the plant.

2. Match the columns.

a. Mint plant	1. Flat green part
b. Leaf	2. Creepers
c. watermelon	3. Tree
d. Neem	4. Herbs

3. Choose the correct answer.

- This is the part that becomes a fruit
1. Seeds 2. Stem 3. Leaf 4. Flower
- Rose plant and hibiscus plant is an example of:
1. Tree 2. Shrubs 3. Herbs 4. Seeds

4. Label the parts of the plant.



ADDITION WORKSHEETS FOR GRADE 3

Find the sums

1

$$\begin{array}{r} 724 \\ 547 \\ + 597 \\ \hline \\ \hline \end{array}$$

2

$$\begin{array}{r} 453 \\ 234 \\ + 654 \\ \hline \\ \hline \end{array}$$

3

$$\begin{array}{r} 768 \\ 879 \\ + 657 \\ \hline \\ \hline \end{array}$$

4

$$\begin{array}{r} 945 \\ 454 \\ + 334 \\ \hline \\ \hline \end{array}$$

5

$$\begin{array}{r} 456 \\ 878 \\ + 567 \\ \hline \\ \hline \end{array}$$

6

$$\begin{array}{r} 234 \\ 432 \\ + 546 \\ \hline \\ \hline \end{array}$$

7

$$\begin{array}{r} 327 \\ 358 \\ + 893 \\ \hline \\ \hline \end{array}$$

8

$$\begin{array}{r} 569 \\ 121 \\ + 871 \\ \hline \\ \hline \end{array}$$

9

$$\begin{array}{r} 987 \\ 345 \\ + 234 \\ \hline \\ \hline \end{array}$$



$$\begin{array}{r} 3152 \\ + 4534 \\ \hline \end{array}$$

$$\begin{array}{r} 4836 \\ + 4152 \\ \hline \end{array}$$

$$\begin{array}{r} 2311 \\ + 5206 \\ \hline \end{array}$$

$$\begin{array}{r} 2626 \\ + 7310 \\ \hline \end{array}$$

$$\begin{array}{r} 980 \\ + 9004 \\ \hline \end{array}$$

$$\begin{array}{r} 2900 \\ + 3081 \\ \hline \end{array}$$

$$\begin{array}{r} 4165 \\ + 3648 \\ \hline \end{array}$$

$$\begin{array}{r} 3469 \\ + 6510 \\ \hline \end{array}$$

$$\begin{array}{r} 5037 \\ + 4121 \\ \hline \end{array}$$

$$\begin{array}{r} 8235 \\ + 1611 \\ \hline \end{array}$$

$$\begin{array}{r} 3104 \\ + 6885 \\ \hline \end{array}$$

$$\begin{array}{r} 5647 \\ + 101 \\ \hline \end{array}$$

$$\begin{array}{r} 8436 \\ + 1363 \\ \hline \end{array}$$

$$\begin{array}{r} 7128 \\ + 1469 \\ \hline \end{array}$$

$$\begin{array}{r} 3472 \\ + 2307 \\ \hline \end{array}$$

$$\begin{array}{r} 4709 \\ + 5090 \\ \hline \end{array}$$

$$\begin{array}{r} 5972 \\ + 4005 \\ \hline \end{array}$$

$$\begin{array}{r} 1822 \\ + 2047 \\ \hline \end{array}$$



The End

